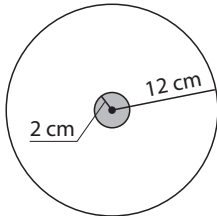


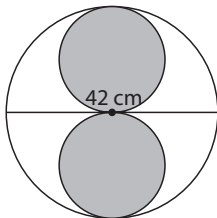
# Actividades

**1** Indica las áreas de las partes no coloreadas de las siguientes figuras:

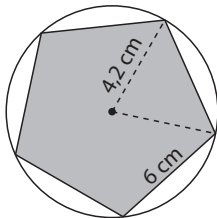
a)



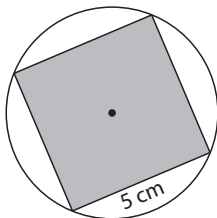
b)



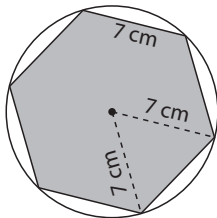
c)



d)



e)



**2** Calcula la longitud de una circunferencia inscrita en un hexágono regular de 8 cm de lado.